


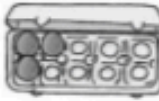











1 getallendictee 

..12.	..14.	..18.	..16.	..19.	..17.	..15.	..11.	..13.	20.
-------	-------	-------	-------	-------	-------	-------	-------	-------	-----









2 vul in.

 	 	 
15	13	19
 	 	 
20	17	18

3 hoeveel zijn het er?

 	 	 
20	17	19

4 teken de blokjes.

 	18	 	13
 	20	 	19

5 vul aan.

